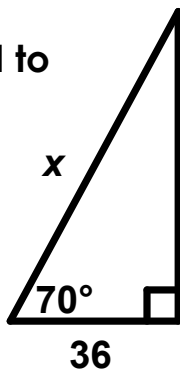


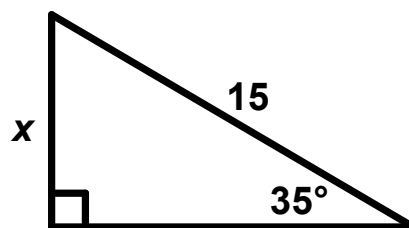
# Finding Sides



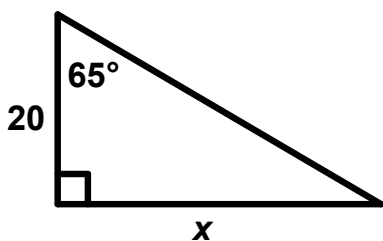
Find the value of  $x$ . Round to the nearest tenth.



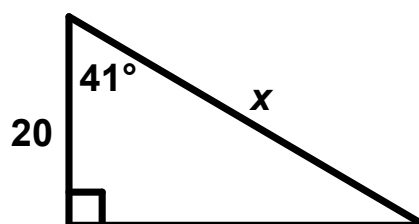
Find the value of  $x$ . Round to the nearest tenth.



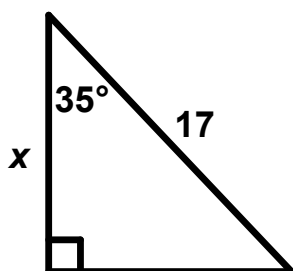
Find the value of  $x$ . Round to the nearest tenth.



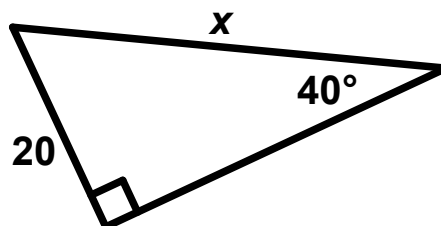
Find the value of  $x$ . Round to the nearest tenth.



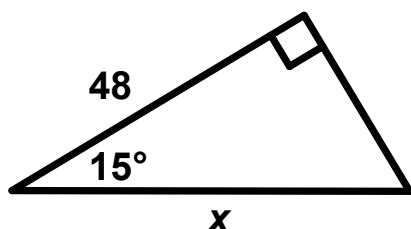
Find the value of  $x$ . Round to the nearest tenth.



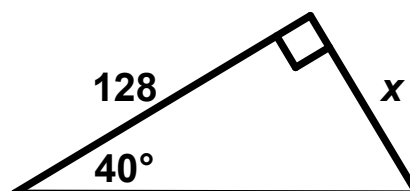
Find the value of  $x$ . Round to the nearest tenth.



Find the value of  $x$ . Round to the nearest tenth.



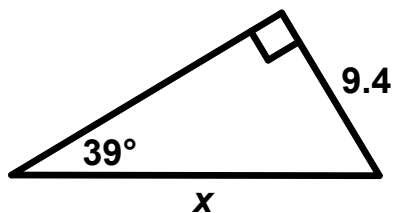
Find the value of  $x$ . Round to the nearest tenth.



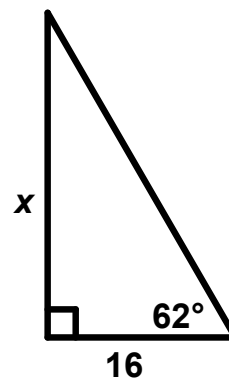
# Finding Sides



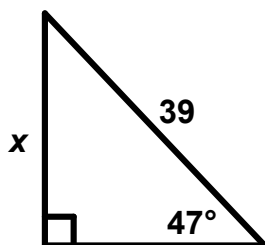
Find the value of  $x$ . Round to the nearest tenth.



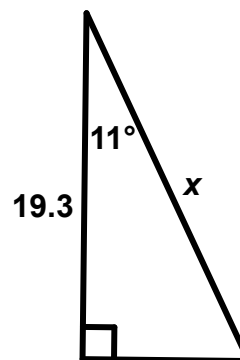
Find the value of  $x$ . Round to the nearest tenth.



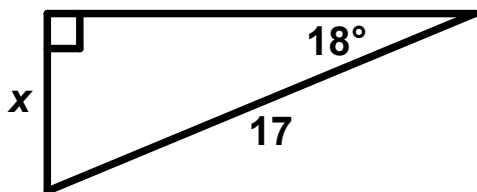
Find the value of  $x$ . Round to the nearest tenth.



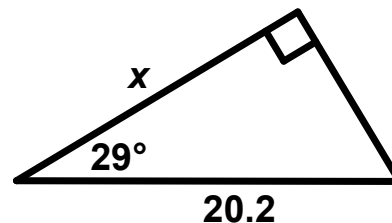
Find the value of  $x$ . Round to the nearest tenth.



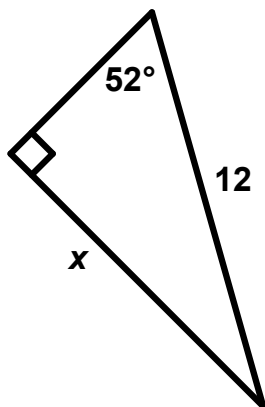
Find the value of  $x$ . Round to the nearest tenth.




Find the value of  $x$ . Round to the nearest tenth.



Find the value of  $x$ . Round to the nearest tenth.



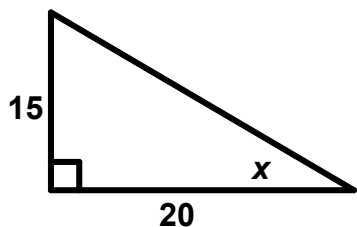
Find the value of  $x$ . Round to the nearest tenth.



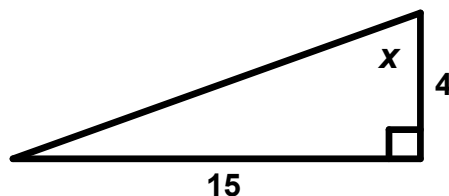
# Finding Angles



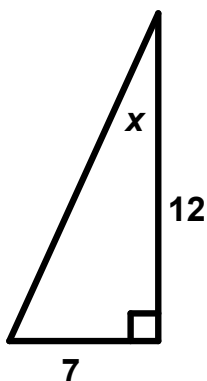
Find the value of  $x$ . Round to the nearest tenth.



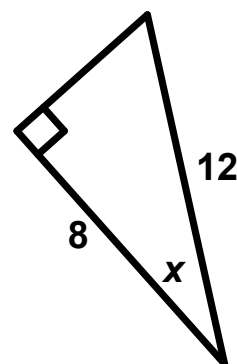
Find the value of  $x$ . Round to the nearest tenth.



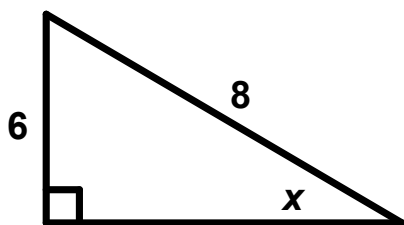
Find the value of  $x$ . Round to the nearest tenth.



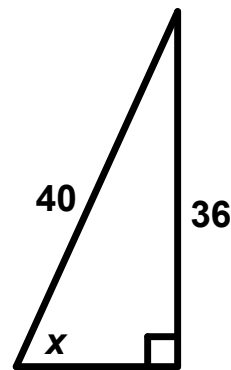
Find the value of  $x$ . Round to the nearest tenth.



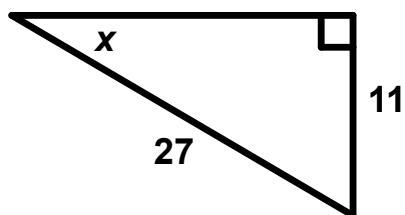
Find the value of  $x$ . Round to the nearest tenth.



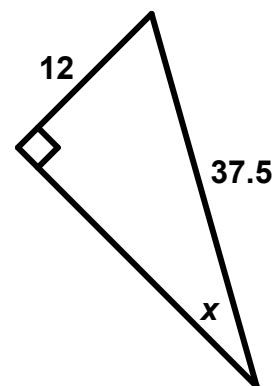
Find the value of  $x$ . Round to the nearest tenth.



Find the value of  $x$ . Round to the nearest tenth.



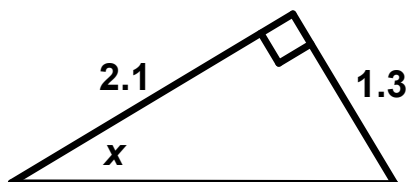
Find the value of  $x$ . Round to the nearest tenth.



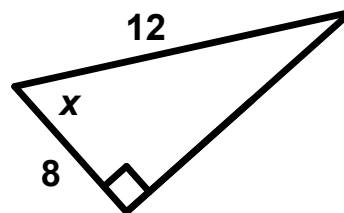
# Finding Angles



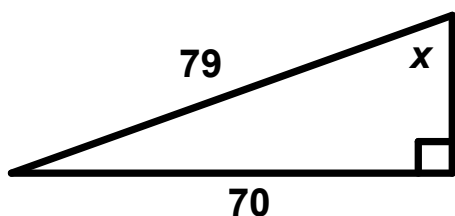
Find the value of  $x$ . Round to the nearest tenth.



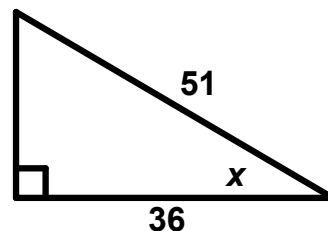
Find the value of  $x$ . Round to the nearest tenth.



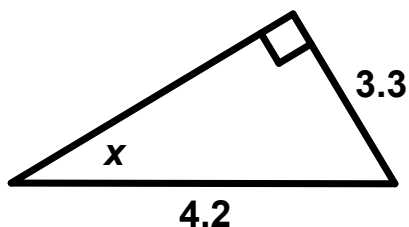
Find the value of  $x$ . Round to the nearest tenth.



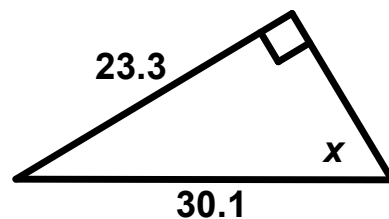
Find the value of  $x$ . Round to the nearest tenth.



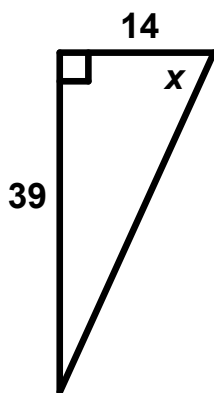
Find the value of  $x$ . Round to the nearest tenth.




Find the value of  $x$ . Round to the nearest tenth.



Find the value of  $x$ . Round to the nearest tenth.



Find the value of  $x$ . Round to the nearest tenth.



# Trigonometric Ratios

## Sum 'Em Activity

### SOLUTIONS

★ 188.9

♣ 162

♥ 164.1

♦ 139.5

♣ 119.6

♠ 163.7

✕ 153.5

♠ 163

# Trigonometric Ratios Sum 'Em Activity DETAILED SOLUTIONS

★  $105.3 + 14.9 + 36.9 + 31.8 = 188.9$

♣  $8.6 + 30.1 + 75.1 + 48.2 = 162$

♥  $42.9 + 28.5 + 30.3 + 62.4 = 164.1$

♦  $26.5 + 19.7 + 48.2 + 45.1 = 139.5$

♣  $13.9 + 5.3 + 48.6 + 51.8 = 119.6$

♠  $31.1 + 17.7 + 64.2 + 50.7 = 163.7$

✕  $49.7 + 9.5 + 24 + 70.3 = 153.5$

◆  $107.4 + 22 + 18.7 + 14.9 = 163$

